


# **Elementary Geography Worksheets**



Questions from Elementary Geography book by: Charlotte M. Mason

# Elementary Geography Worksheets



Questions from Elementary Geography book by: Charlotte M. Mason

These worksheets focus on strengthening students' comprehension and written expression through geography-based questions and copywork exercises. The comprehension questions are designed to help students carefully read, recall, and understand key geographical concepts. By answering in complete thoughts, students practice organizing ideas clearly and demonstrating their understanding of the material.

Copywork activities are included to help students develop attention to detail, spelling accuracy, grammar, and neat handwriting. By carefully copying meaningful sentences related to geography, students reinforce correct language patterns while becoming more familiar with important geographical terms and ideas.

PREPARED BY: KAT LEE

All Rights Reserved.

No part of this handwriting worksheets may be reproduced, copied, or transmitted in any form or by any means, electronic or mechanical, including photocopying, or any information storage and retrieval system, without prior written permission from the publisher. Additionally, reproduction or sale of this unit study in whole or in part, is strictly prohibited.



Lesson 01




Sun, moon and stars, by day and night,  
At God's commandment give us light;  
And when we wake, and while we sleep,  
Their watch, like guardian angels, keep.

Handwriting practice lines consisting of solid top and bottom lines with a dashed midline.


• Lesson 02 •

Illustrate how you see and what you understood from the words "Our World."





Lesson 03




Oh! I long, dear mamma, to learn more  
of these stories,  
From books that are written to please  
and to teach,  
And I wish I could see half the curious glories  
The sailor-boy told me down on the beach.

Handwriting practice lines consisting of multiple sets of three horizontal lines (top, middle dashed, bottom) for writing practice.

Lesson 04

Answer these questions from lesson 2 and 4.



- 1. What is the shape of the world? \_\_\_\_\_  
\_\_\_\_\_
- 2. Give one reason for supporting the world is round. \_\_\_\_\_  
\_\_\_\_\_
- 3. Does this prove that the world is round in every direction like a ball? \_\_\_\_\_  
\_\_\_\_\_
- 4. Why do we say the world is a sphere or globe? \_\_\_\_\_  
\_\_\_\_\_
- 5. How is this proven. \_\_\_\_\_  
\_\_\_\_\_
- 6. What causes this effect? \_\_\_\_\_  
\_\_\_\_\_
- 7. Does this prove that the world is a sphere? \_\_\_\_\_  
\_\_\_\_\_
- 8. What is the circle called? \_\_\_\_\_
- 9. Can the roundness of the world be seen in any other way? \_\_\_\_\_  
\_\_\_\_\_

Lesson 05

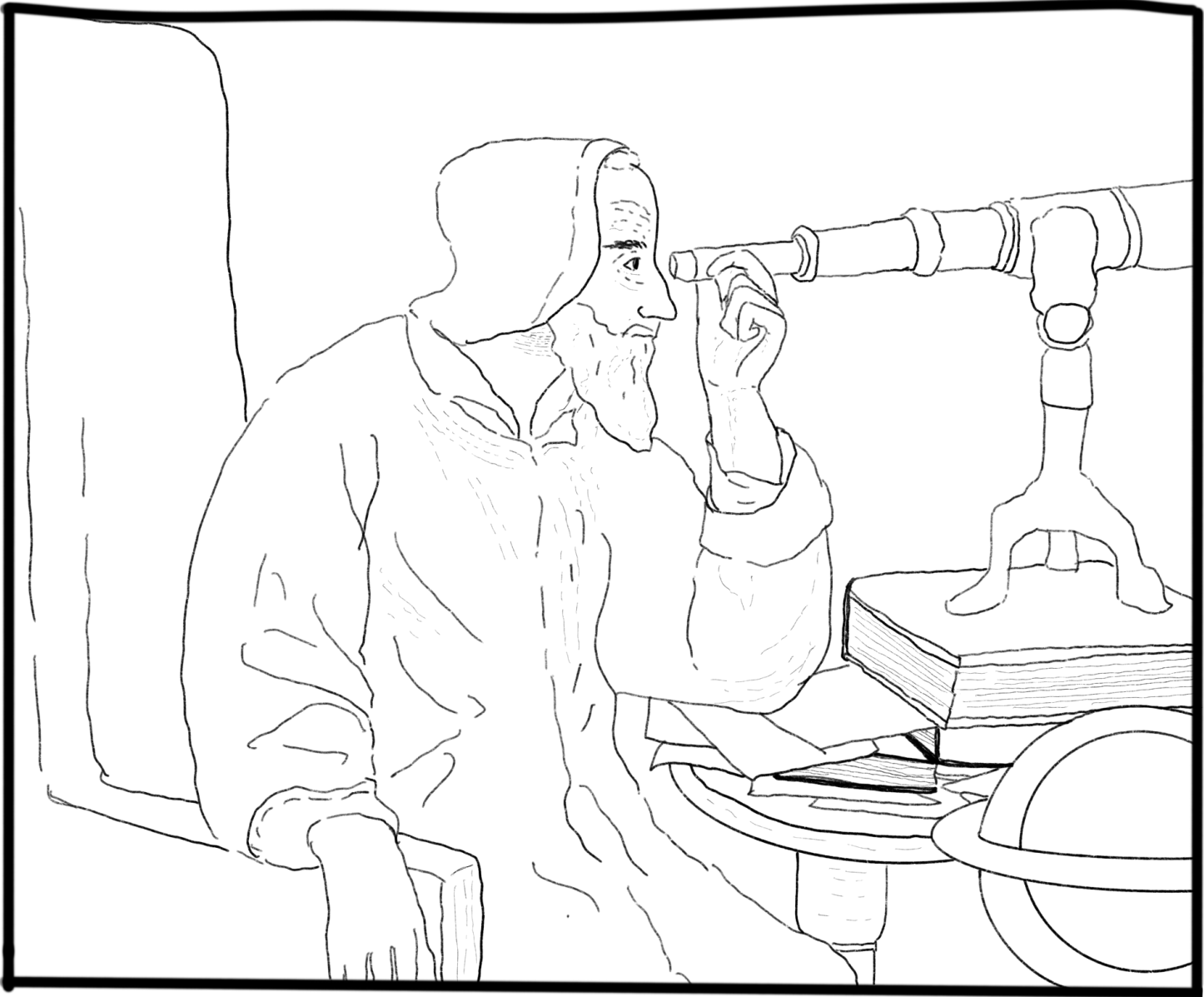


When the blazing sun is gone,  
When nothing shines upon,  
Then you show your little light—  
Twinkle, twinkle, all night.

Handwriting practice lines consisting of solid top and bottom lines with a dashed middle line for letter height guidance. There are five sets of these lines provided for writing practice.

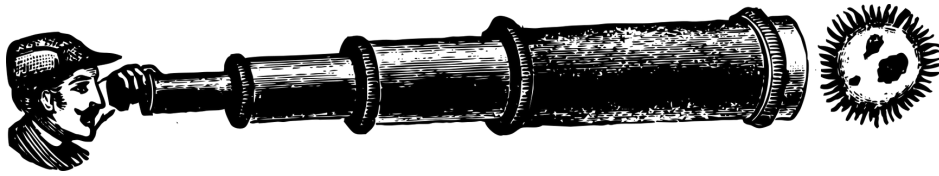
Lesson 06

Color the picture below.



# Lesson 07

Answer these questions from lessons 6 and 7.



1. What discover did Galileo make? \_\_\_\_\_

2. What is a planet? \_\_\_\_\_

3. How do planets shine? \_\_\_\_\_

\_\_\_\_\_

4. Is it not our world larger than the stars and planets? \_\_\_\_\_

\_\_\_\_\_

5. What is our planets name? \_\_\_\_\_

6. How long is our year? \_\_\_\_\_

7. Is there a reason why our year should be 365 days in length? \_\_\_\_\_

\_\_\_\_\_

8. What is the path she takes round the sun called? \_\_\_\_\_

\_\_\_\_\_

Lesson 08



How beautiful on harvest-slopes  
To see the sunshine lie;  
Or on the paler reaped fields  
Where yellow shocks stand high!

Handwriting practice lines consisting of solid top and bottom lines with a dashed midline. There are five sets of these lines provided for writing practice.

Lesson 08




How beautiful on harvest-slopes  
To see the sunshine lie;  
Or on the paler reaped fields  
Where yellow shocks stand high!

Handwriting practice lines consisting of solid top and bottom lines with a dashed midline. There are five sets of these lines provided for practice.

# Lesson 9


Draw and color something you do during the day..



Draw and color something you do during the night.



Lesson 10




You talk of wonderful things you see;  
You say the sun shines bright;  
I feel him warm, but how can he,  
Or make it day or night?

Handwriting practice lines consisting of multiple sets of three horizontal lines: a solid top line, a dashed middle line, and a solid bottom line.

# Lesson 11

Answer these questions from lessons 9 and 11



1. What is the Earth's axis? \_\_\_\_\_

\_\_\_\_\_

2. Where is the line? \_\_\_\_\_

3. What are the poles? \_\_\_\_\_

\_\_\_\_\_

4. In what time does the Earth turn quite round? \_\_\_\_\_

\_\_\_\_\_

5. When do we have day? \_\_\_\_\_

\_\_\_\_\_

6. When do we have night? \_\_\_\_\_

\_\_\_\_\_

7. What causes the the change of day and night? \_\_\_\_\_


\_\_\_\_\_

8. What is the equator? \_\_\_\_\_


\_\_\_\_\_

# Lesson 12


During each of these four seasons, write down or draw activities you can do.




Autumn



Winter



Spring



Summer



# Lesson 14

Answer these questions from lesson 14.



1. Name the four seasons. \_\_\_\_\_

\_\_\_\_\_

2. What is the difference between them. \_\_\_\_\_

\_\_\_\_\_

\_\_\_\_\_

3. How do we get summer? \_\_\_\_\_

\_\_\_\_\_

4. When do we have winter? \_\_\_\_\_

\_\_\_\_\_

5. What part of the world is turned to him then? \_\_\_\_\_


\_\_\_\_\_

4. When do we have spring and autumn? \_\_\_\_\_

\_\_\_\_\_

\_\_\_\_\_


Lesson 15



The little birds they dance along,  
And look so glad and gay;  
I love to hear their pleasant song,  
I feel as glad as they.

Handwriting practice lines consisting of ten sets of horizontal lines. Each set includes a solid top line, a dashed middle line, and a solid bottom line, providing a guide for letter height and placement.

Lesson 15



The little birds they dance along,  
And look so glad and gay;  
I love to hear their pleasant song,  
I feel as glad as they.

Handwriting practice lines consisting of ten sets of horizontal lines. Each set includes a solid top line, a dashed middle line, and a solid bottom line, providing a guide for letter height and placement.


Lesson 16

Dictate to the child a paragraph from the poem Harvest Thanksgiving.  
Or any poem you like about Thanks Giving. Color the image below.



Handwriting practice lines consisting of ten sets of horizontal lines. Each set includes a solid top line, a dashed middle line, and a solid bottom line, providing a guide for letter height and placement.


# Lesson 17



When icicles hang by the wall,  
And Dick the shepherd blows his nail,  
And Tom bears logs into the hall,  
And milk comes frozen home in pail.

Handwriting practice lines consisting of ten sets of horizontal lines. Each set includes a solid top line, a dashed middle line, and a solid bottom line, providing a guide for letter height and placement.

Lesson 17



When icicles hang by the wall,  
And Dick the shepherd blows his nail,  
And Tom bears logs into the hall,  
And milk comes frozen home in pail.

Handwriting practice lines consisting of solid top and bottom lines with a dashed midline. There are ten sets of these lines provided for practice.

•	Lesson 18	•
---	-----------	---

Make a list of different countries and indicate whether they fall under the hot or cold category. You can cut out pictures or write down the country's name.

Hot Countries	Cold Countries

## Lesson 19

Color the picture below.



The humming-bird! The humming-bird!  
So fairy-like and bright,  
It lives among the sunny flowers,  
A creature of delight!

# Lesson 20

Answer these questions from lesson 20.



1. Which is the hottest part of the Earth? \_\_\_\_\_

\_\_\_\_\_

2. Why? \_\_\_\_\_

3. Which are the coldest parts? \_\_\_\_\_

\_\_\_\_\_

4. Why are these cold? \_\_\_\_\_

\_\_\_\_\_

5. What are the belts of the Earth between is called? \_\_\_\_\_

\_\_\_\_\_

6. What can you say about the lands in these? \_\_\_\_\_

\_\_\_\_\_



Lesson 21

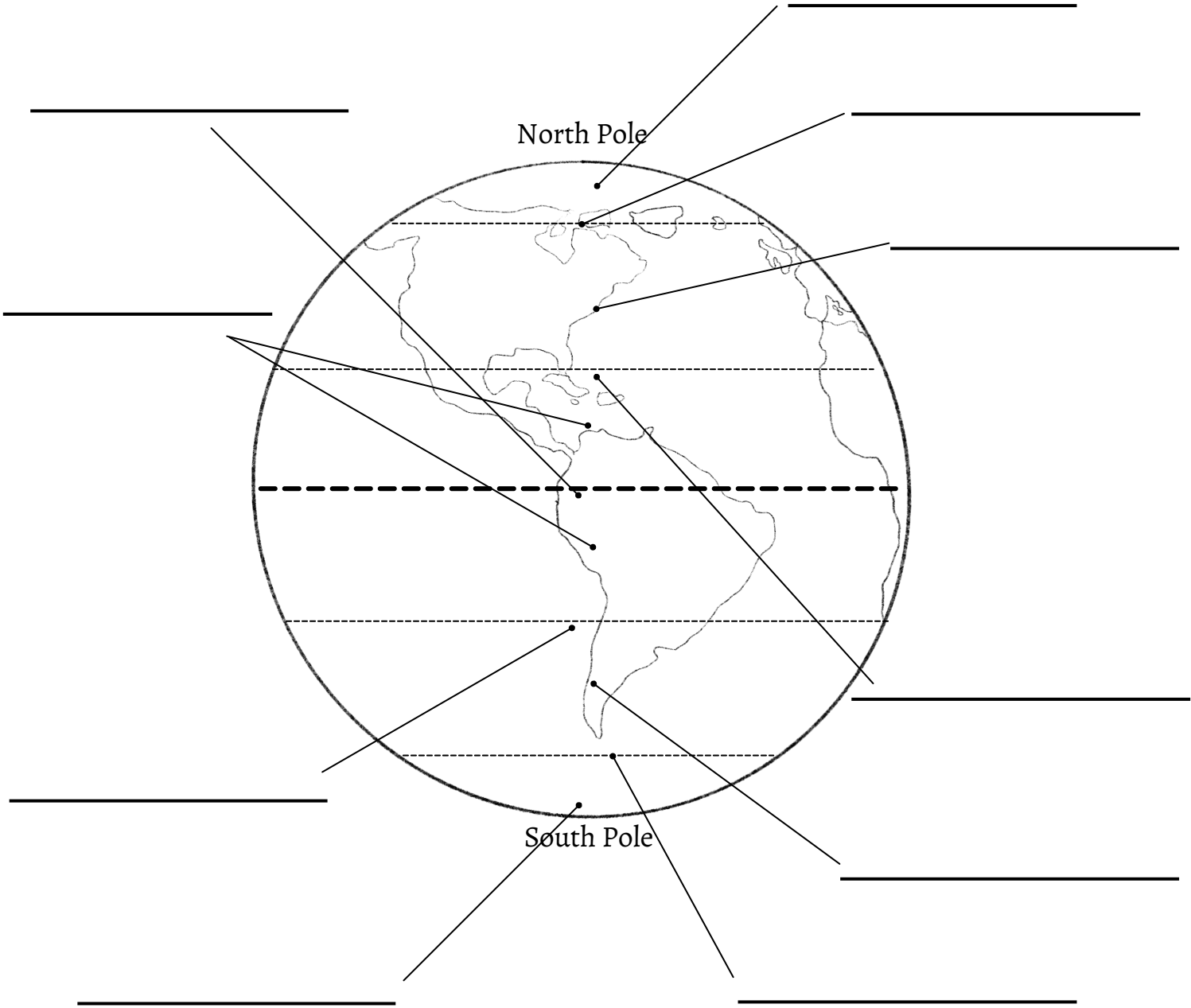


The ice was here, the ice was there,  
The ice was all around:  
It cracked and growled, and roared and howled,  
Like noises in a sound.

Handwriting practice lines consisting of multiple sets of three horizontal lines (top, middle dashed, bottom) for writing practice.

# Lesson 22

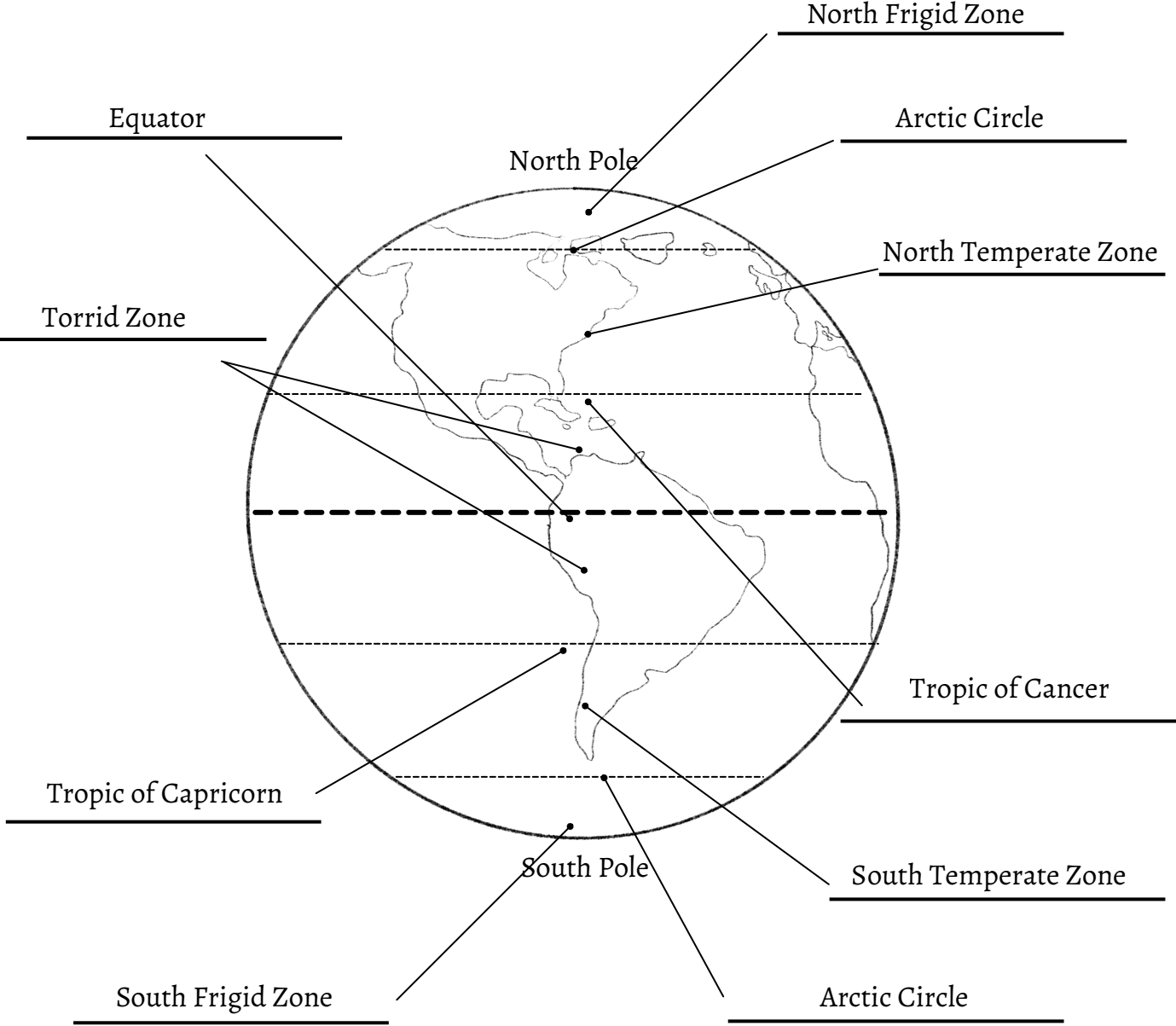
Label the Zones according to the illustration from lesson 22.



- 
- |                     |                   |                      |               |
|---------------------|-------------------|----------------------|---------------|
| Tropic of Capricorn | South Frigid Zone | South Temperate Zone | Arctic Circle |
| Equator             | North Frigid Zone | Tropic of Cancer     |               |
| Torrid Zone         | Arctic Circle     | North Temperate Zone |               |
-

Lesson22

Label the The Zones according to the illustration from lesson 22.  
(Answer Key)



.....

# Lesson 22

Answer these questions from lesson 22.



1. What is latitude? \_\_\_\_\_

2. Why is it important to know the distance of a place from the equator?

---

---

3. How is latitude measured? \_\_\_\_\_

---

4. What does "parallel with equator" mean? \_\_\_\_\_

---

5. How many parallels are there in north of the equator? \_\_\_\_\_

---

6. Which are the most important lines to remember? \_\_\_\_\_

---

Lesson 23



Of subtle fire; the wind blows cold  
While the morning doth unfold,  
Now the birds begin to rouse,  
And the squirrel from the boughs  
Leaps, to get him nuts and fruits.



A series of horizontal lines for handwriting practice, consisting of solid top and bottom lines with a dashed midline, repeated multiple times down the page.

# Lesson 24

Paste or draw a picture of a sunrise and sunset.



# Lesson 24

Answer these questions from lesson 24.

1. Where does the sunrise? \_\_\_\_\_

2. Where does he set? \_\_\_\_\_

3. If you stand with your right hand to the east, in which direction are you looking?

\_\_\_\_\_

4. Where is the south \_\_\_\_\_

5. How may you find out the direction you are moving in at noon? \_\_\_\_\_

\_\_\_\_\_


6. How may the other points be known? \_\_\_\_\_

\_\_\_\_\_



Lesson 25

Dictate some parts of the poem Evening to the child/children.



Handwriting practice lines consisting of solid top and bottom lines with a dashed middle line. There are ten such lines provided for writing.

# Lesson 26 & 27

Answer these questions from lesson 26 & 27.

1. What is meridian? \_\_\_\_\_

2. What does the word "meridian" mean? \_\_\_\_\_

3. What are the meridians so called? \_\_\_\_\_

\_\_\_\_\_

4. Why do places north and south of each other have mid-day at the same time?


\_\_\_\_\_

5. How many of these meridians are there? \_\_\_\_\_

\_\_\_\_\_

# Lesson 28

Answer these questions from lesson 26 & 27.



1. How many points of the compass are there? \_\_\_\_\_

2. Which are the principal ? \_\_\_\_\_

3. Which points are next in importance? \_\_\_\_\_

4. Name them. \_\_\_\_\_

5. What does the circle upon the card of the compass represent ? \_\_\_\_\_


\_\_\_\_\_

6. How is it divided? \_\_\_\_\_

\_\_\_\_\_

# Lesson 29


Draw and color a compass.



compass

# Lesson 30


Draw a map/plan of your room. Don't forget to  
them label them!



my room

# Lesson 31


Find a map of your town, draw or print the map of your town, and circle where you live.



my town

# Lesson 32

Draw a map of the country you live in, color and label the city where you live.



Map of the country  
where I live in.

Lesson 32

Answer these questions from lesson 32.

1. How may the size of a country be learned from a map? \_\_\_\_\_

\_\_\_\_\_

2. How we may know its distance from the equator? \_\_\_\_\_

\_\_\_\_\_

3. What does a map teach as to the appearance of a country? \_\_\_\_\_

\_\_\_\_\_

4. What may we learn about towns? \_\_\_\_\_

\_\_\_\_\_



# Lesson 34

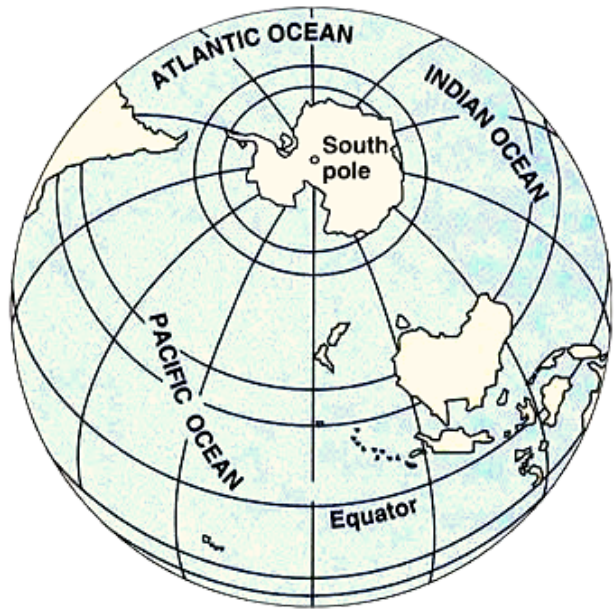
Fill in the blanks.



Land hemisphere

46.4% Land

53.6% Water



Water hemisphere

11.6% Land

88.4% Water

\_\_\_\_\_ hemisphere has 46.4% \_\_\_\_\_ and \_\_\_\_\_ water.

Water \_\_\_\_\_ has \_\_\_\_\_ land and 88.4% \_\_\_\_\_.

# Lesson 35

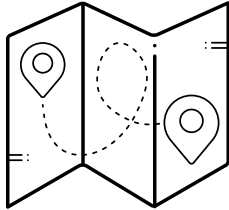
Answer these questions from lesson 35.

1. What is a continent? \_\_\_\_\_

2. How many continents are there? \_\_\_\_\_

3. Name them. \_\_\_\_\_

4. What is the coast? \_\_\_\_\_




## Map questions

Grab a map and ask the map questions from lesson 38.



# Lesson 36


Draw a mountain and label the parts.



Mountain.

# Lesson 36

Answer these questions from lesson 36..



1. What is a hill? \_\_\_\_\_
2. What is a mountain? \_\_\_\_\_
3. What is a plain? \_\_\_\_\_
4. What is a tableland? \_\_\_\_\_
5. What is a valley? \_\_\_\_\_
6. Name the parts of a mountain. \_\_\_\_\_
7. How do mountains usually lie? \_\_\_\_\_
8. What is a chain or range? \_\_\_\_\_
9. What is a group? \_\_\_\_\_

# Lesson 37

Color the river.



River.

# Lesson 37

Answer these questions from lesson 37



1. What is a stream? \_\_\_\_\_

2. What is a river? \_\_\_\_\_

3. What is the source of a river? \_\_\_\_\_

4. What is its mouth? \_\_\_\_\_

5. What is its bed? \_\_\_\_\_

6. What are its banks? \_\_\_\_\_

7. What is a river valley? \_\_\_\_\_

8. What are tributaries? \_\_\_\_\_

9. What is a lake? \_\_\_\_\_

10. How may a river form a lake? \_\_\_\_\_

11. What is the current of a river? \_\_\_\_\_

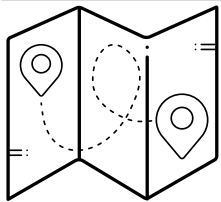
\_\_\_\_\_

12. What is a delta? \_\_\_\_\_

# Lesson 38

Answer these questions from lesson 38

1. What is generally meant by a country? \_\_\_\_\_
2. Where are the boundaries of a country? \_\_\_\_\_
3. What is a kingdom? \_\_\_\_\_
4. What is a republic? \_\_\_\_\_
5. What is a capital city? \_\_\_\_\_
6. What are its banks? \_\_\_\_\_
7. What is a sea-port? \_\_\_\_\_
8. What is a harbour? \_\_\_\_\_
9. What is an army? \_\_\_\_\_
10. What is a navy? \_\_\_\_\_




## Map questions

Grab a map and ask the map questions .

- Point a capital city of a country.
- Have them find at least 5 capital cities.

## Lesson 39

Have the child read this poem aloud.



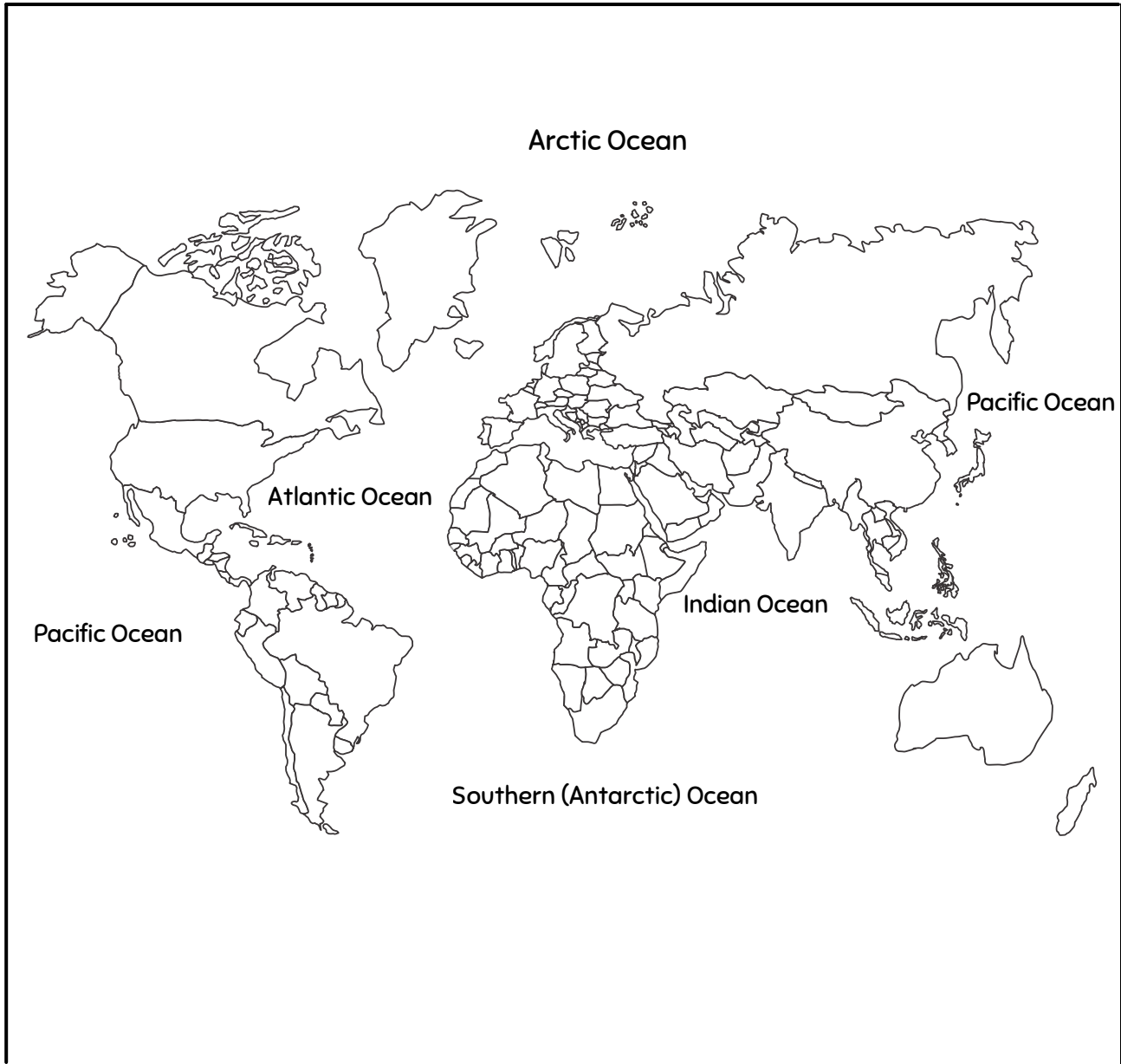
### *A Walk By The Sea*

BY Kristin Martin

I went for a walk  
alone by the sea  
but the water kept me company.  
I whispered to it  
as I walked on its sand  
and told it of all the things I planned.  
It whispered to me  
as I walked on its shore  
and told me secrets from long before.  
I went for a walk  
with my friend the sea  
and we kept each other company.

# Lesson 41

Color the ocean part blue.



1. What is an ocean? \_\_\_\_\_


2. How many oceans are there? \_\_\_\_\_

3. Name the five oceans. \_\_\_\_\_

\_\_\_\_\_

# Lesson 41

Answer these questions from lesson 41.



1. What is a sea? \_\_\_\_\_
2. What is a gulf? \_\_\_\_\_
3. What is a strait? \_\_\_\_\_
4. What is a channel? \_\_\_\_\_
5. What is a bay? \_\_\_\_\_
6. What is an island? \_\_\_\_\_
7. What is a group of island? \_\_\_\_\_
8. What is the main land? \_\_\_\_\_
9. What is a peninsula? \_\_\_\_\_
10. What is an isthmus? \_\_\_\_\_
11. What is a cape? \_\_\_\_\_
12. By what other names is such a point of land known? \_\_\_\_\_

\_\_\_\_\_